



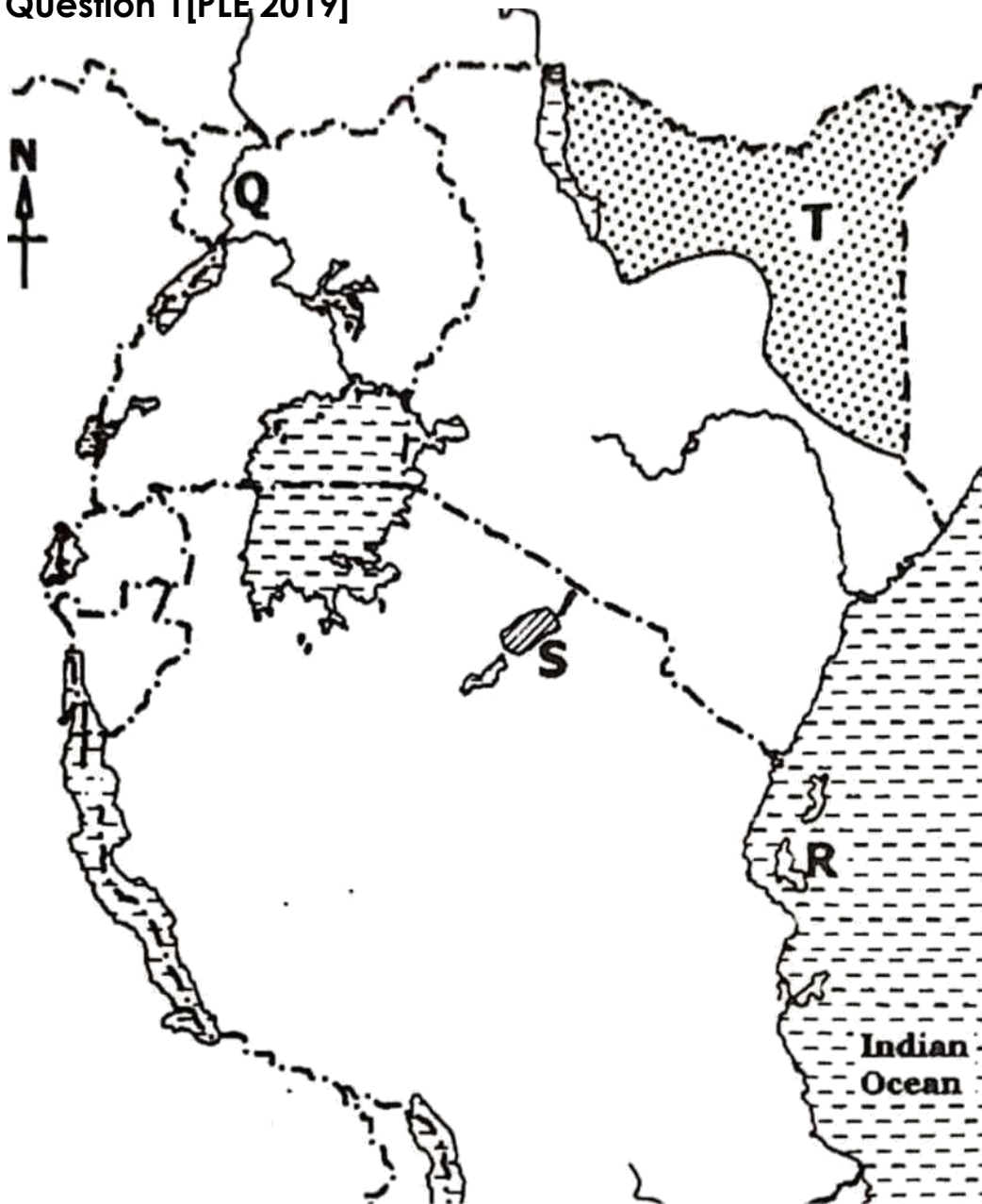
# **MAP, DIAGRAM AND DATA INTERPRETATION WORK FOR P.7**

**TR ABEL 0753136243**

The background features a complex, abstract geometric design composed of overlapping, semi-transparent polygons in shades of light blue and grey. The shapes create a sense of depth and movement, resembling a stylized landscape or architectural structure.

**2020**

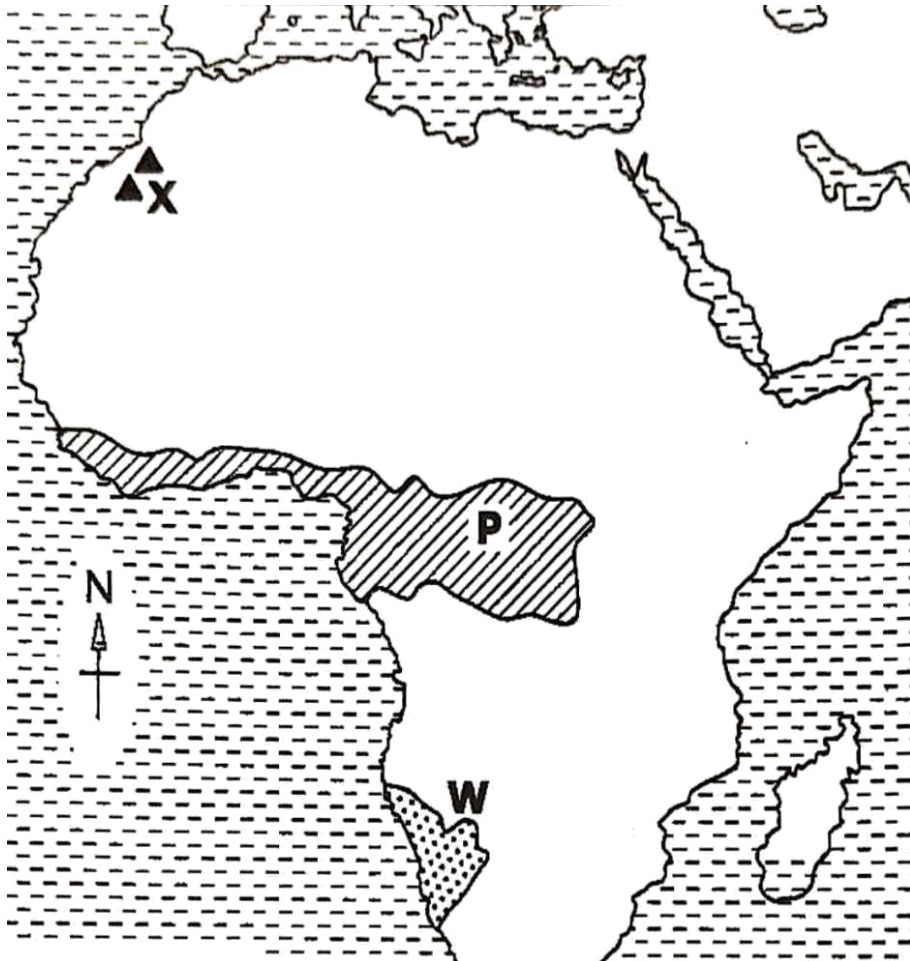
Question 1 [PLE 2019]



- a) Name the ethnic group that settled in the area marked T
- 
- b) Mention any one of the archaeological sites in the area marked S.
- 
- c) State one reason why colonialists were interested in finding out the source of river marked Q above.
-

Give any one reason why most explorers first went to island marked R before entering the interior of East Africa.

**Question 1b[PLE 2019]**



a) What process led to the formation of the mountain marked X?

\_\_\_\_\_

b) Describe the climate of the shaded area marked P.

\_\_\_\_\_

c) State any one factor which influences the vegetation in the area marked W.

\_\_\_\_\_

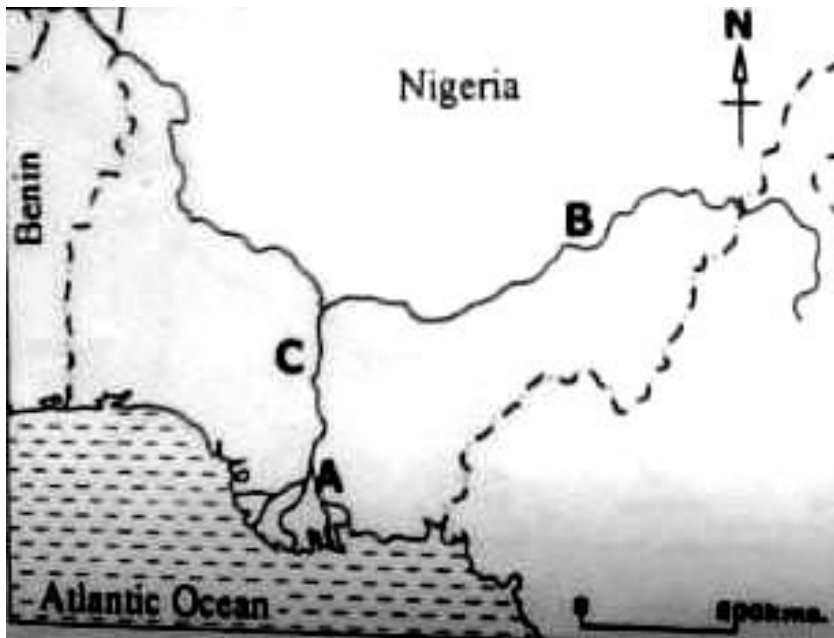
On the map above, shade a region that experiences Mediterranean type of climate.

**Question 2 [PLE 2018]**



- a) Name the river marked L  
\_\_\_\_\_
- b) Where was the homeland of the ethnic group that entered East Africa using route Y  
\_\_\_\_\_
- c) Mention the traditional cash crop grown on island marked Z  
\_\_\_\_\_
- d) How has the railway line marked X contributed to the economic development of Zambia.  
\_\_\_\_\_

**Question 2b [PLE 2018]**



a) Name the features marked by the following letters;

i. A

---

ii. B

---

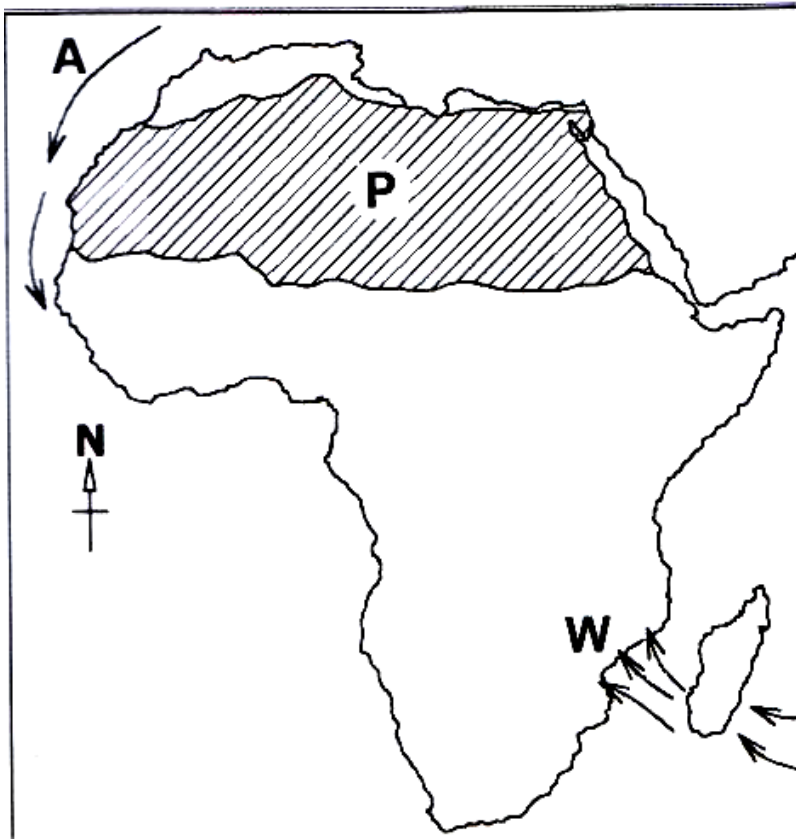
b) Name any one river in Africa that ends in the same way as the river marked C

---

c) How is part marked A economically important to Nigeria?

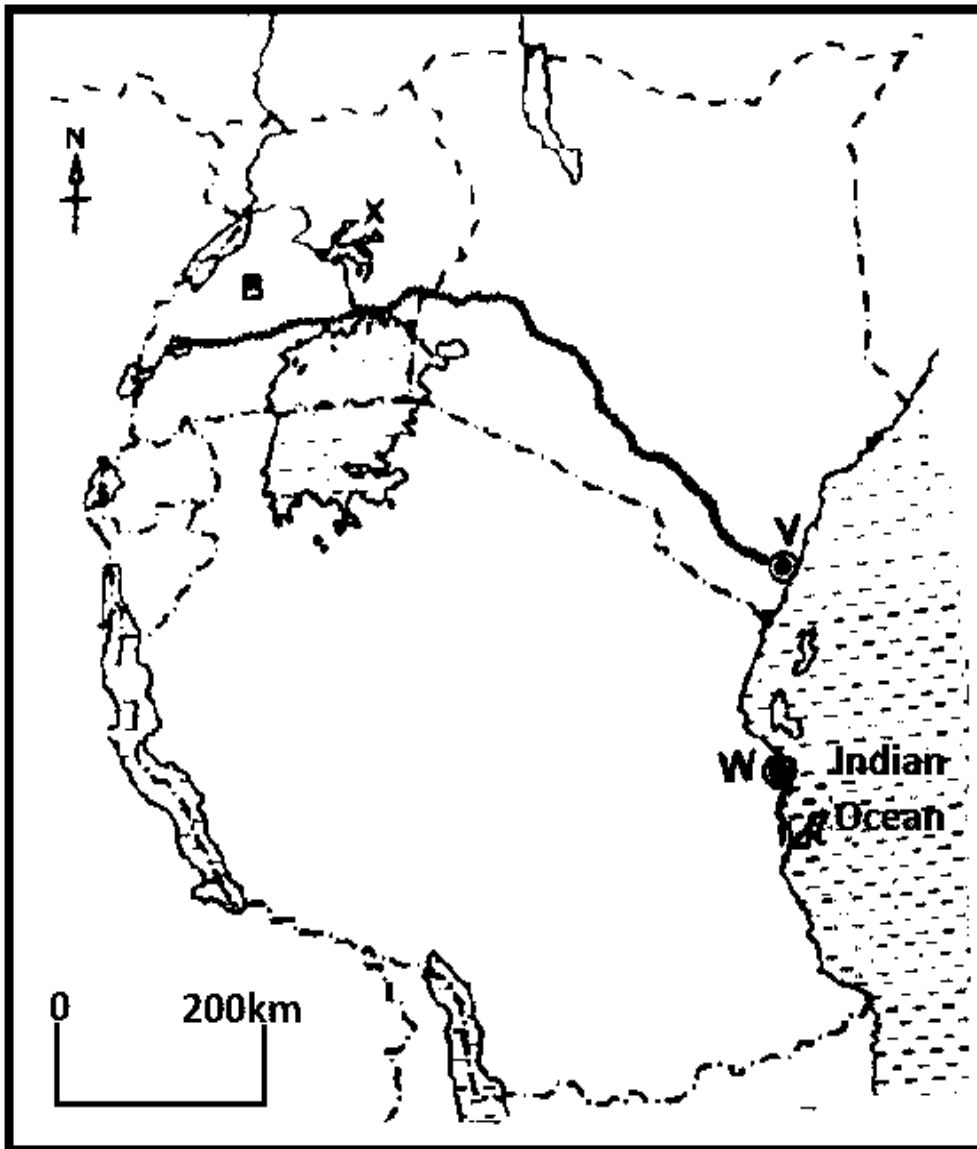
---

**Question 3[PLE 2017]**



- a) Name the ocean current marked with letter A  
\_\_\_\_\_
- b) How do the winds marked W affect of the eastern part of Africa?  
\_\_\_\_\_
- c) State the type of climate experienced in the shaded region marked P  
\_\_\_\_\_
- d) Why does the shaded region marked P experience very cold nights?  
\_\_\_\_\_

Question 4[PLE 2016]



a) Name the sea ports marked V and W

---

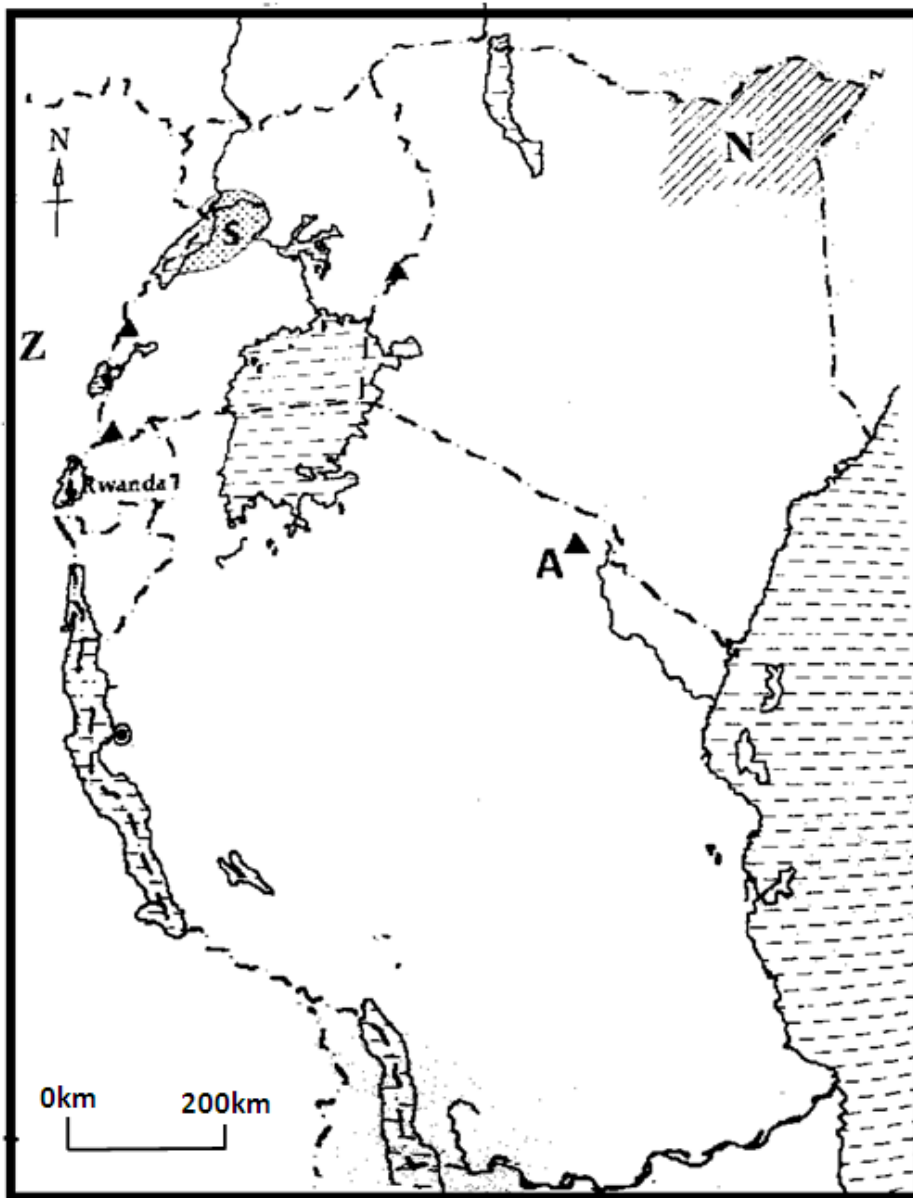
b) Why was the railway built from Port V to country B?

---

c) Why is water transport difficult on lake marked X?

---

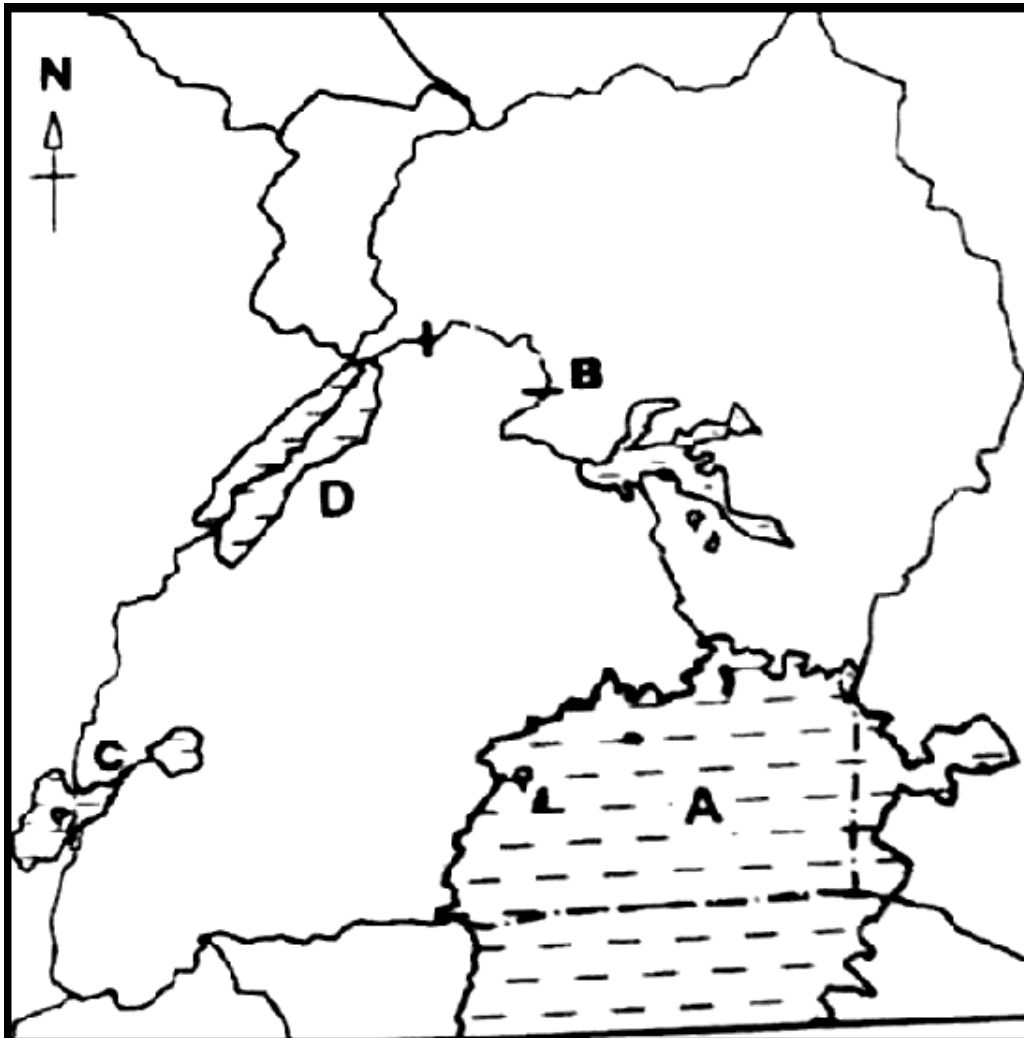
Question 5 [PLE 2015]



- a) Name the mountain peak marked with letter A
- 
- b) Why is the shaded area marked with letter N not suitable for plantation farming?
- 
- c) Give one advantage country marked with letter Z has over Rwanda when carrying out International trade.
-



Question 6 [PLE 2014]



a) Name the feature marked with letter

I. A

---

II. B

---

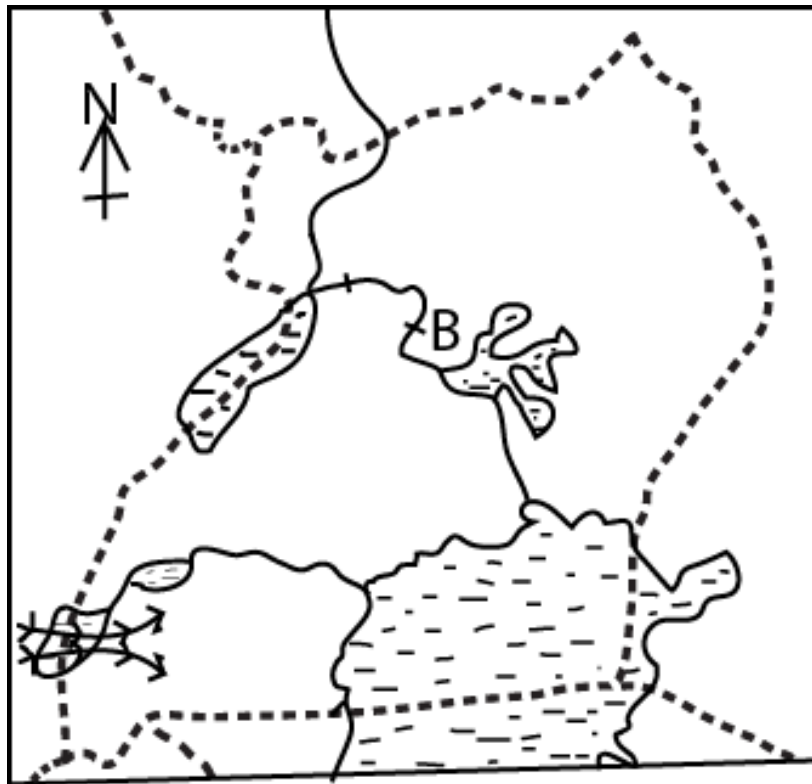
b) Why are many people living around the feature marked A?

---

c) Which mineral is mined in the area marked D?

---

**Question 7 [PLE 2013]**



(a) Name the ethnic group that followed the route marked. →→→

---

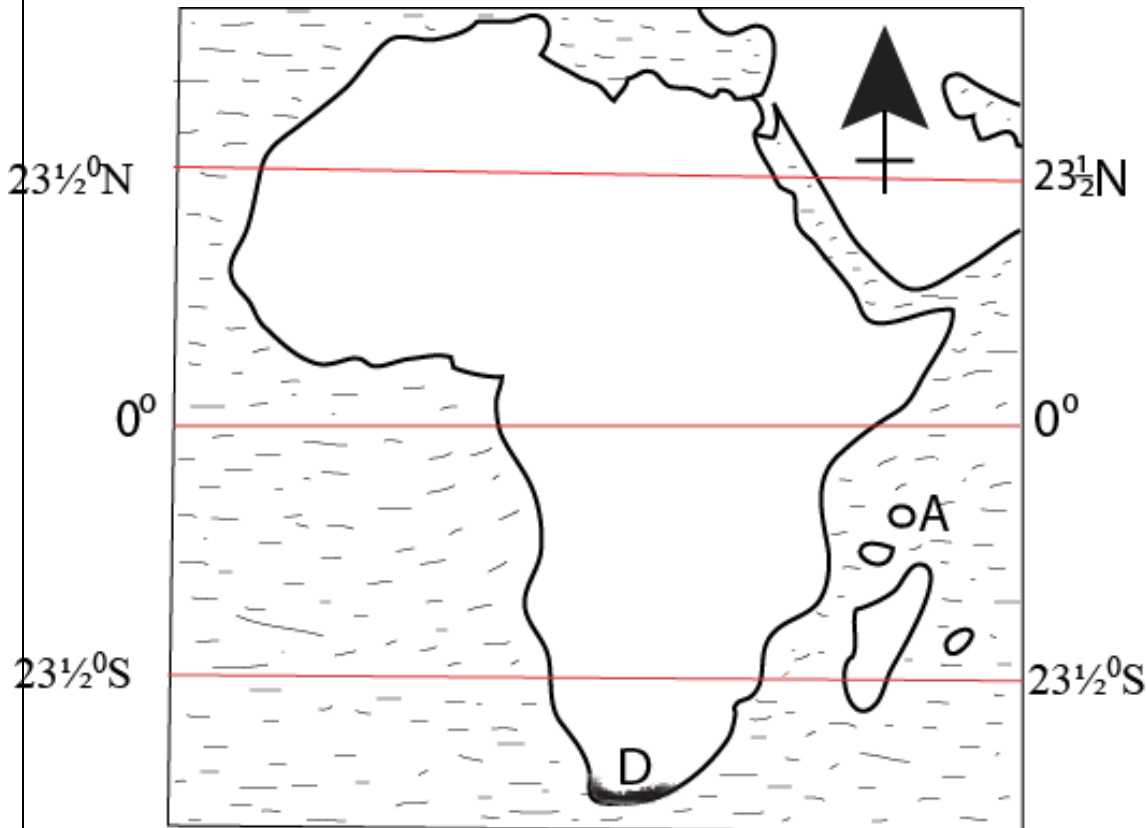
(b) Give any two reasons why the ethnic group in (a) above left their original home land

---

---

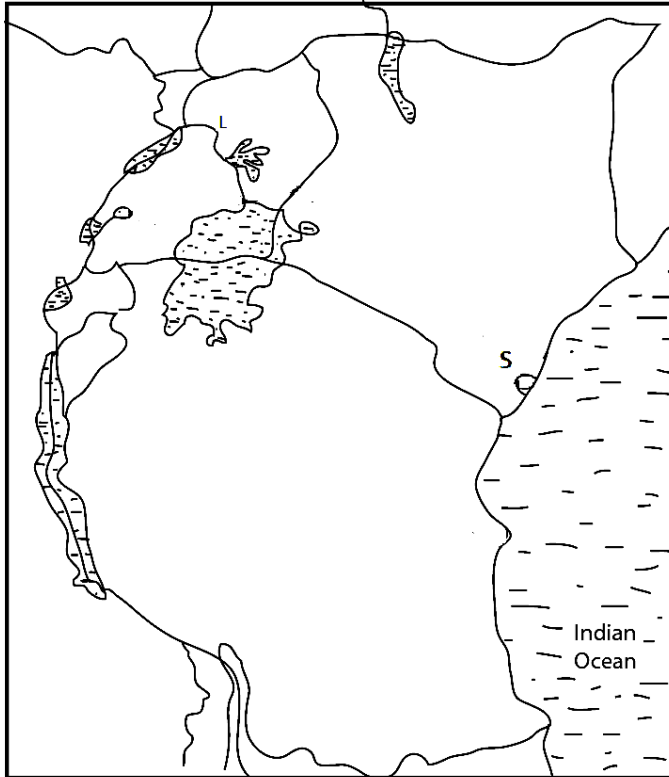
c) Use an arrow to show on the map above the route Nilo-Hamites followed when entering Uganda.

**Question 7b [PLE 2013]**



- (a) Name the Island marked A on the map above
- 
- (b) Why are the islands marked A on the map above remembered in the colonial history of Bunyoro and Buganda kingdom?
- 
- (c) Use letter c to show the Tropic of cancer on the sketch map above.
- (d) Mention any one way in which the vegetation zone marked D is important to the people of this area
-

**Question 8 [PLE 2012]**



(a) Name the port marked S

---

(b) Give any one economic activity that is carried out at Ports.

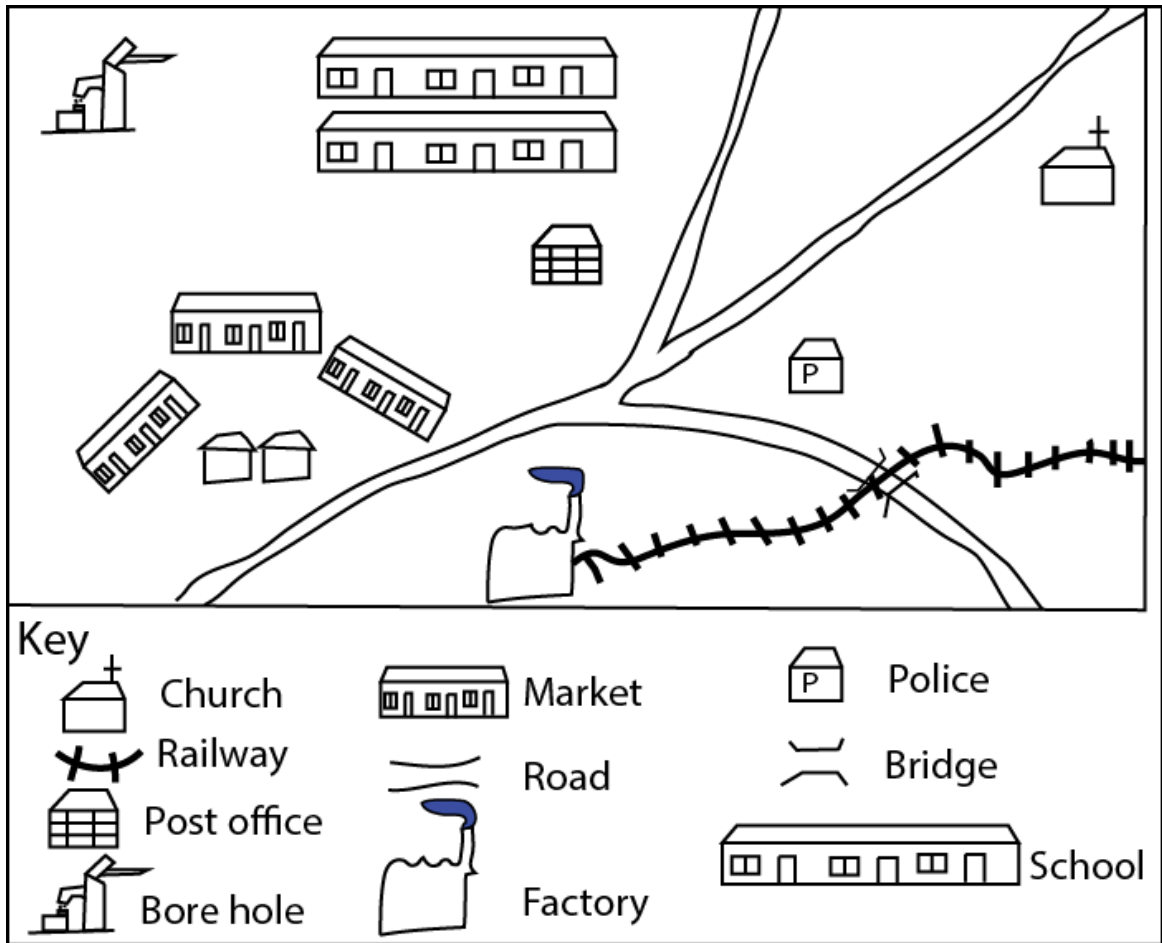
---

(c) Name the part of River Nile marked with letter L

---

(d) Use letter p to mark the deepest lake in East Africa

**Question 9 [PLE 2011]**



(a) Name any two social service centres found in this area.

---

---

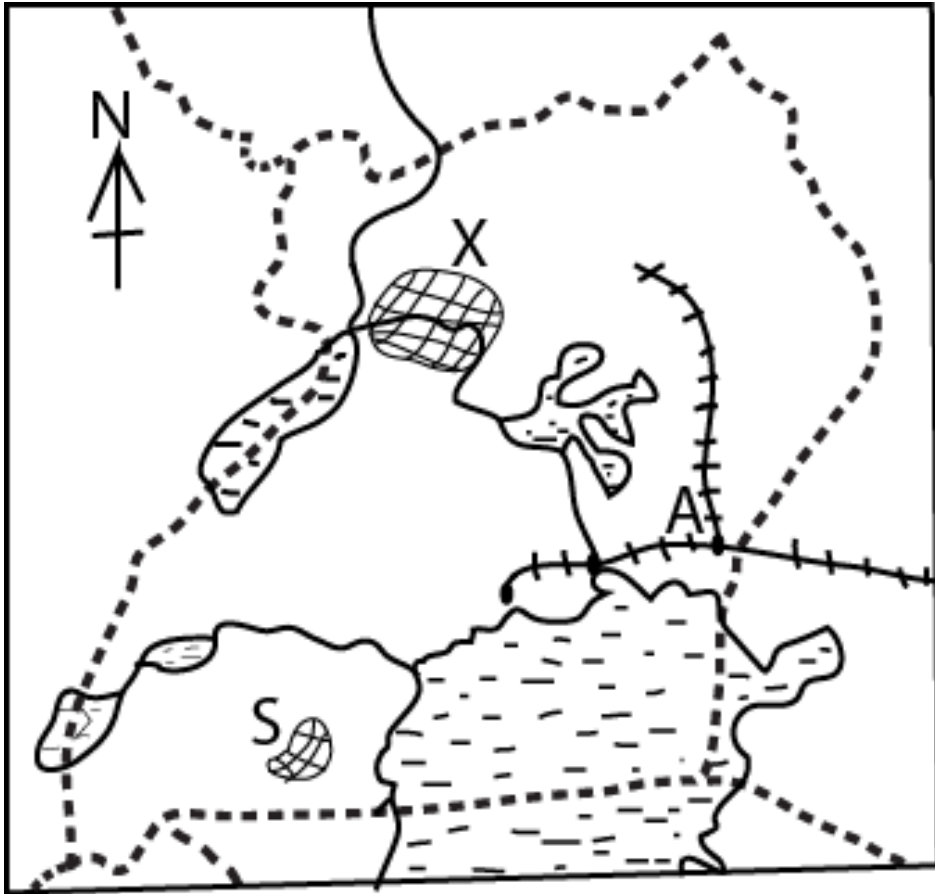
(b) Give any one reason why many people would settle in this area

---

(c) What direction is the post office from the factory?

---

Question 9b [PLE 2011]



a) Name the town marked A

---

b) Mention the tourist attraction places marked X and S

(i) X

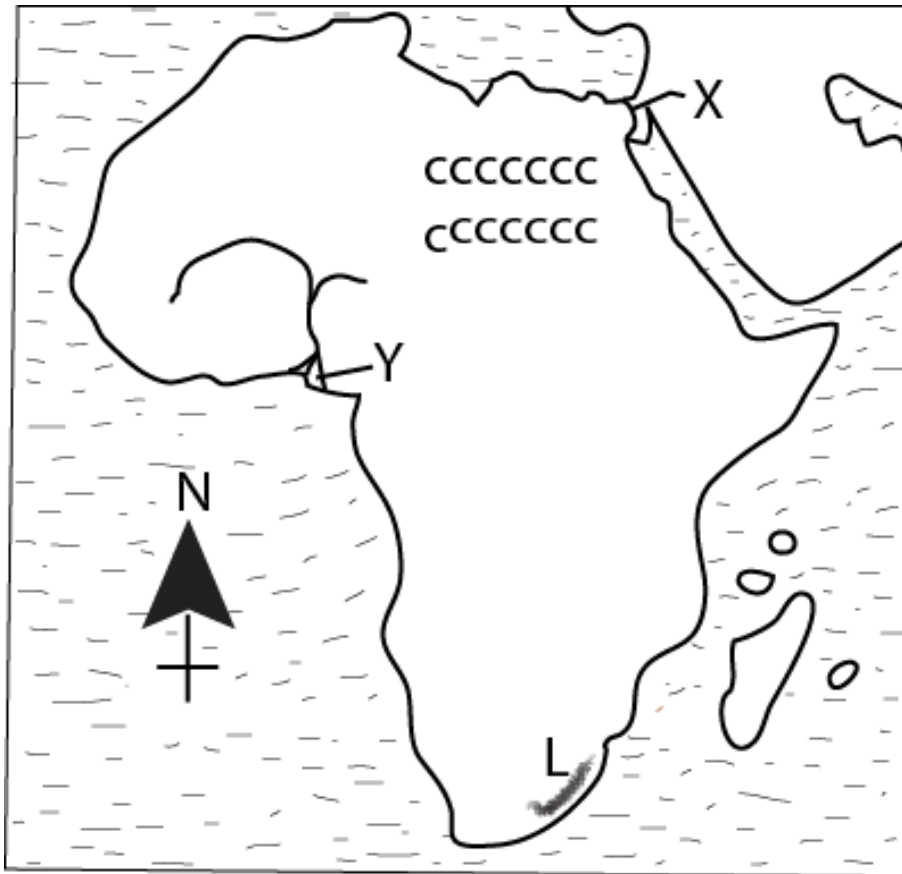
---

(ii) S

---

c) Use letter P to show the lake where oil been discovered in Uganda

**Question 10 [PLE 2010]**



(a) Name the water passage marked with X

---

(b) Mention one economic activity carried out in the area marked Y

---

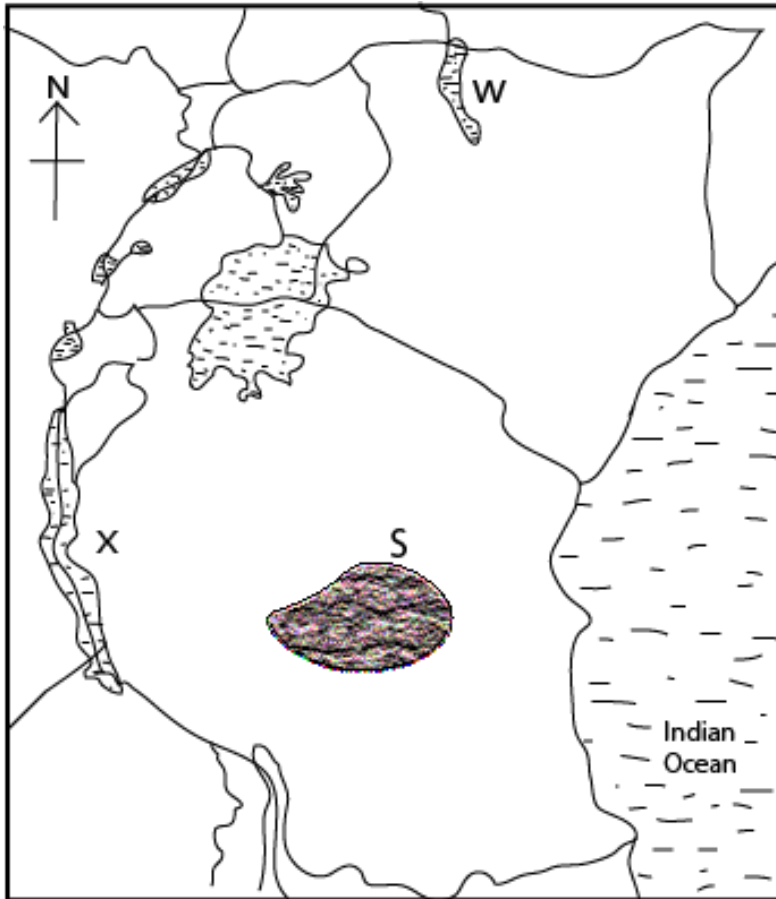
(c) Why is the region marked CCC sparsely populated?

---

(d) How were the mountain ranges marked L formed?

---

**Question 11 [PLE 2008]**

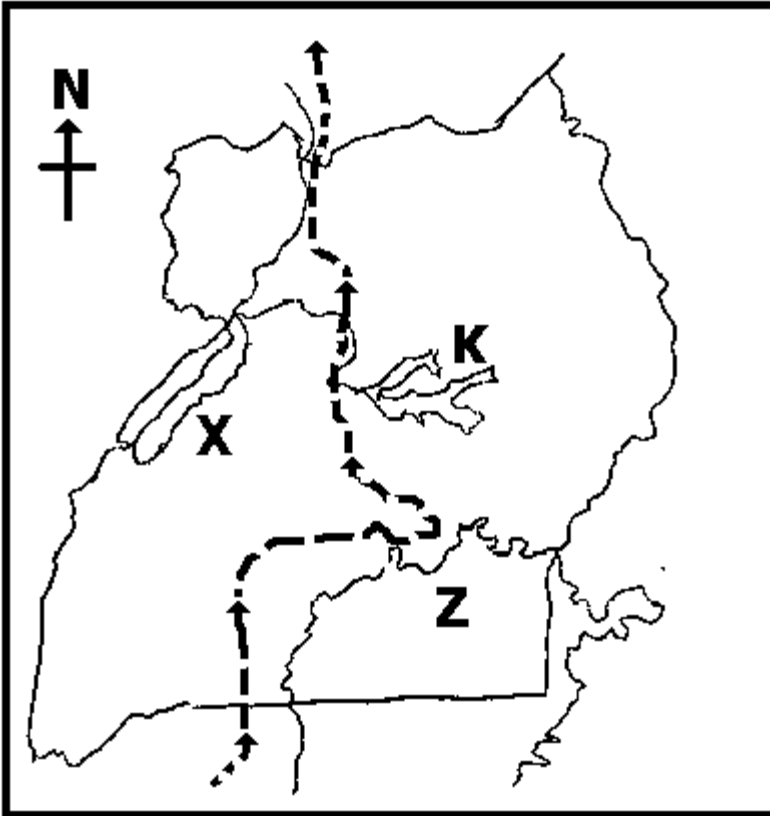


- (a) Name the country marked A  
\_\_\_\_\_
- (b) Give one cause of low population in the area marked S  
\_\_\_\_\_
- (c) State one economic activity that is carried out in the lake marked X.  
\_\_\_\_\_
- (d) Give one similarity in the formation of lake X and W  
\_\_\_\_\_  
\_\_\_\_\_



## Question 12

Use the map of Uganda below to answer questions about it.



- (a) Name the European explorer who used the route marked  on the map.

---

- (c) How different is the Lake marked **Z** from Lake marked **X** in terms of their formation?

---

- (d) Why is the lake marked **K** having a lot of plant cover on it?

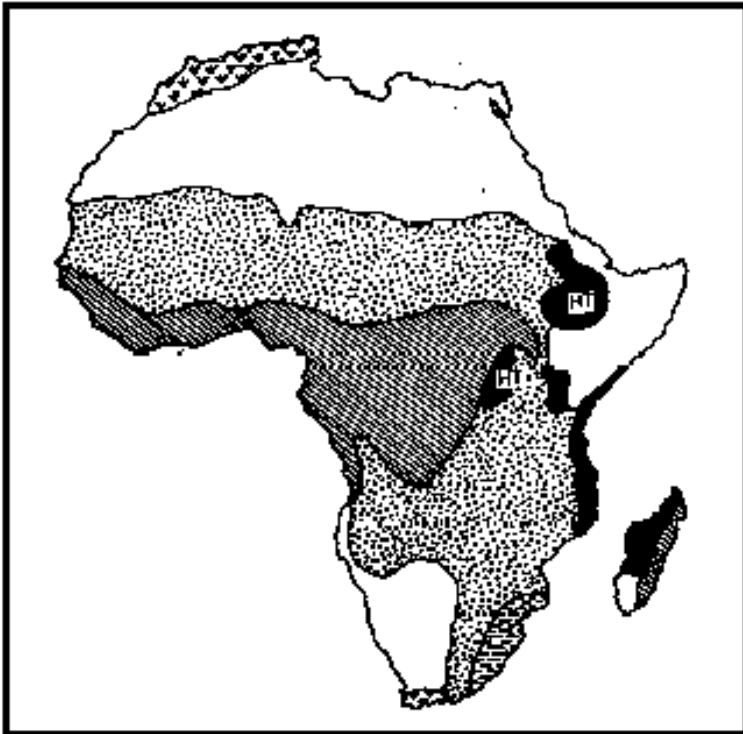
---

- (e) Mention one important economic activity that is likely to start soon on lake marked **X**.

---

### Question 13

Study the map below and answer the questions about it.



(a) Give one characteristic of vegetation shaded 

---

(b) Why is the region shaded  sparsely populated?

---

(c) What type of climate is experienced in areas shaded  ?

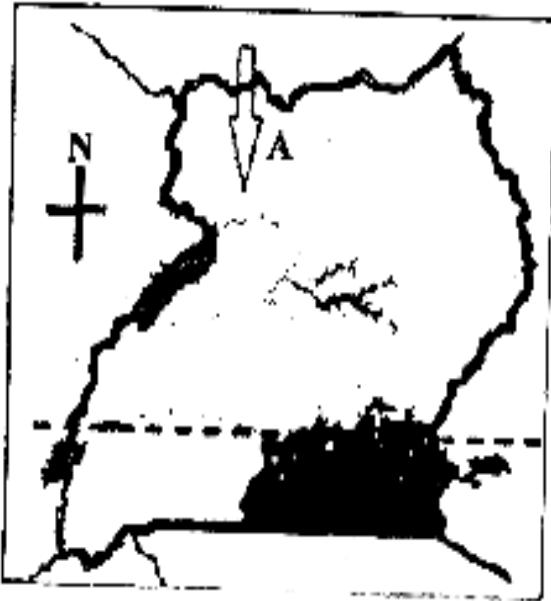
---

(d) Using letter DDD, locate the Mozambique channel on the map above.

---

### Question 14

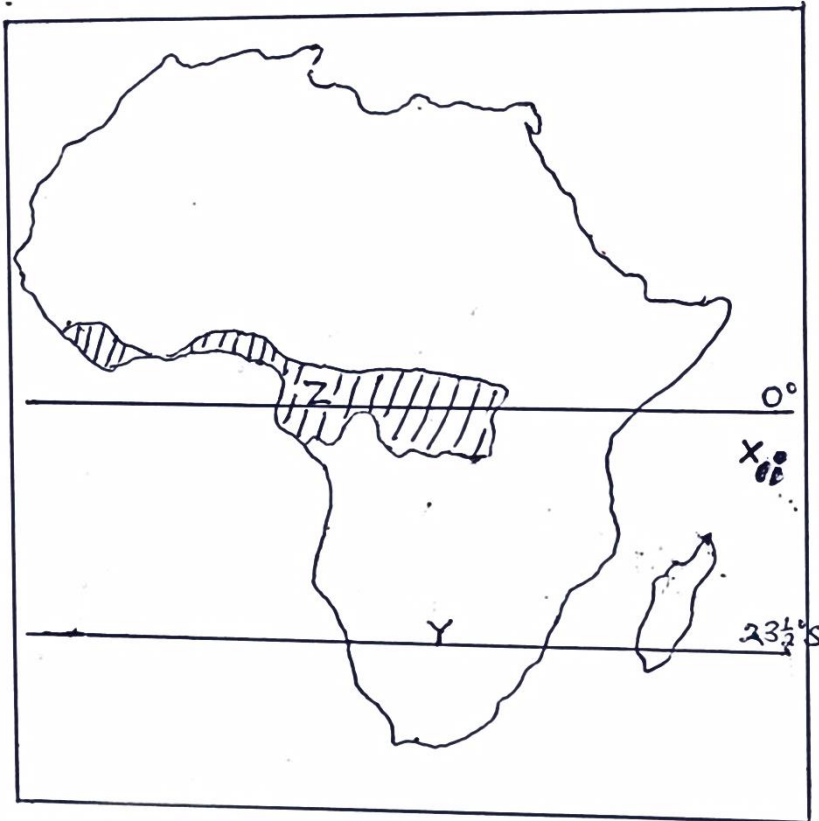
Study the sketch map below and use it to answer questions that follow.



- a) Name the European explorer who used direction marked A on the map to enter Uganda.
- 
- b) Mention the town in Sudan where the explorer you have named in above met John Speke and J. Grant.
- 
- c) State any one reason why the explorer you have named in (a) above was liked by the people of Northern Uganda.
-

### Question 15

Study the map below and answer the following questions.



a) Name the natural vegetation that grows in the shaded area marked Z.

---

b) Which latitude is marked Y on the map.

---

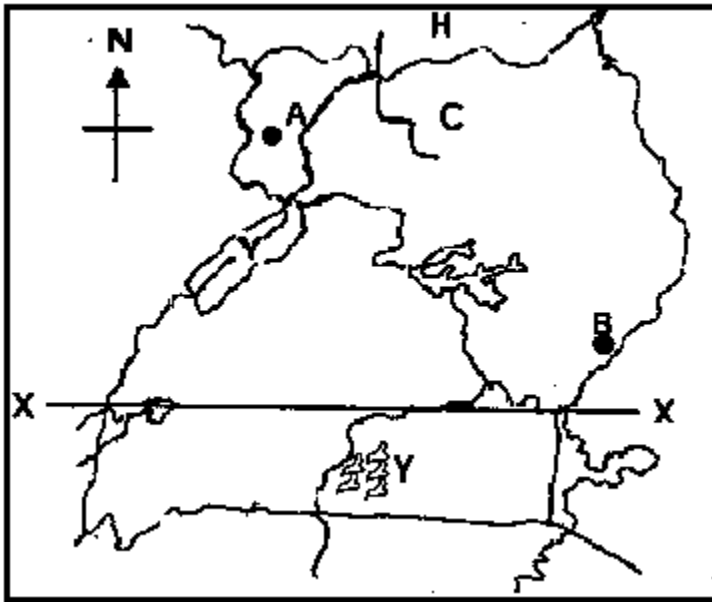
c) Name the two traditional leaders of Uganda who were exiled to Islands X.

---

---

### Question 16

Use the map of Uganda to answer the questions.



(a) Name the river marked C.

---

(b) Which country borders Uganda at H?

---

(c) What direction is A from B?

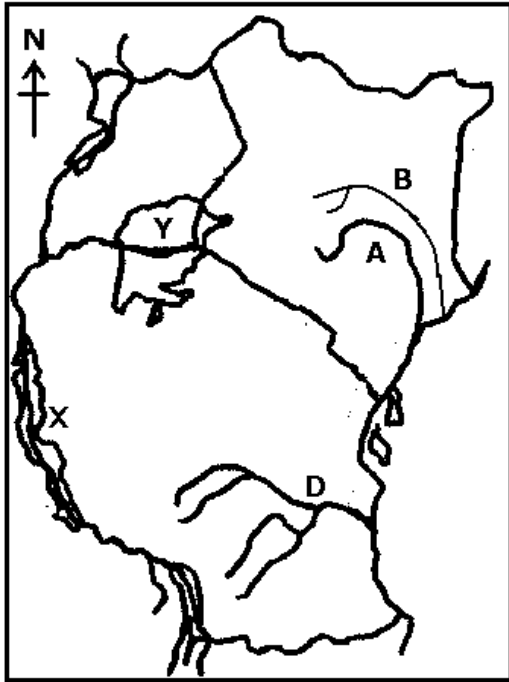
---

d) Give the economic importance of Islands Y.

---

### Question 17

Study the map below and answer the questions that follow.



(a) Name the river marked **B**.

---

(b) How was the formation of physical feature **X** different from that of **Y**?

---

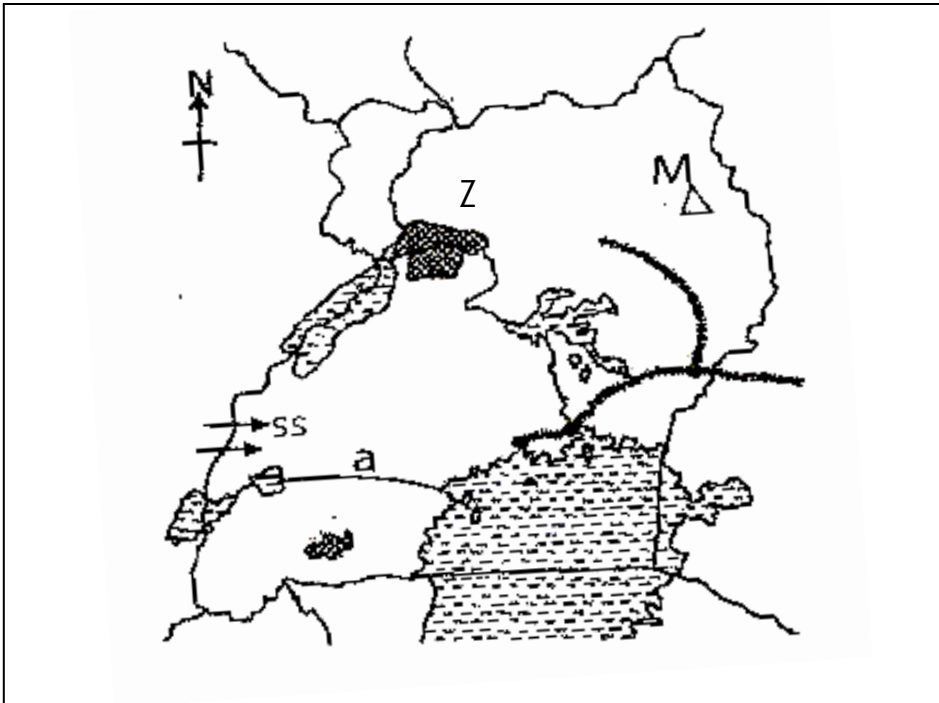
(c) List down two characteristics of rift valley lakes.

(i) \_\_\_\_\_

(ii) \_\_\_\_\_

### Question 18

Study the map below to answer the questions that follow.



a) Which ethnic group entered Uganda using the route SS?

---

b) Why is mountain marked M not snow capped?

---

c) Name the economic activity carried out in the region marked 'Z'.

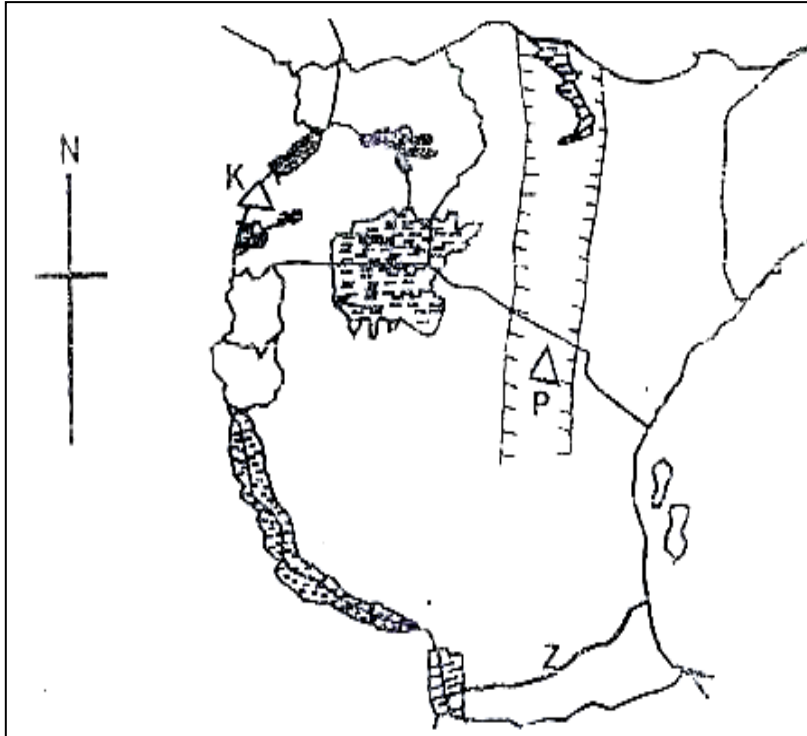
---

d) Name the river marked 'a'.

---

### Question 19

Use the map below to answer the questions that follow.



a) How is the physical feature P and K different in their way of formation?

---

b) Which river Z forms a natural boundary between Tanzania and Mozambique?

---

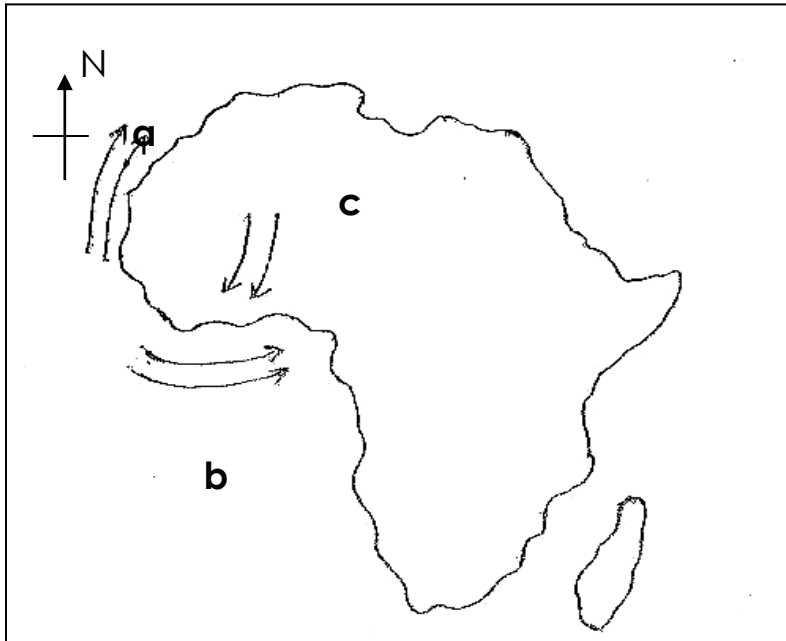
c) Name the country which is below river marked Z on the map.

---



### Question 20

Use the map below to answer the questions that follow.



a) Name the ocean marked **b**.

---

b) Name the ocean current marked **a**.

---

c) How do winds marked c influence the climate of that particular area?

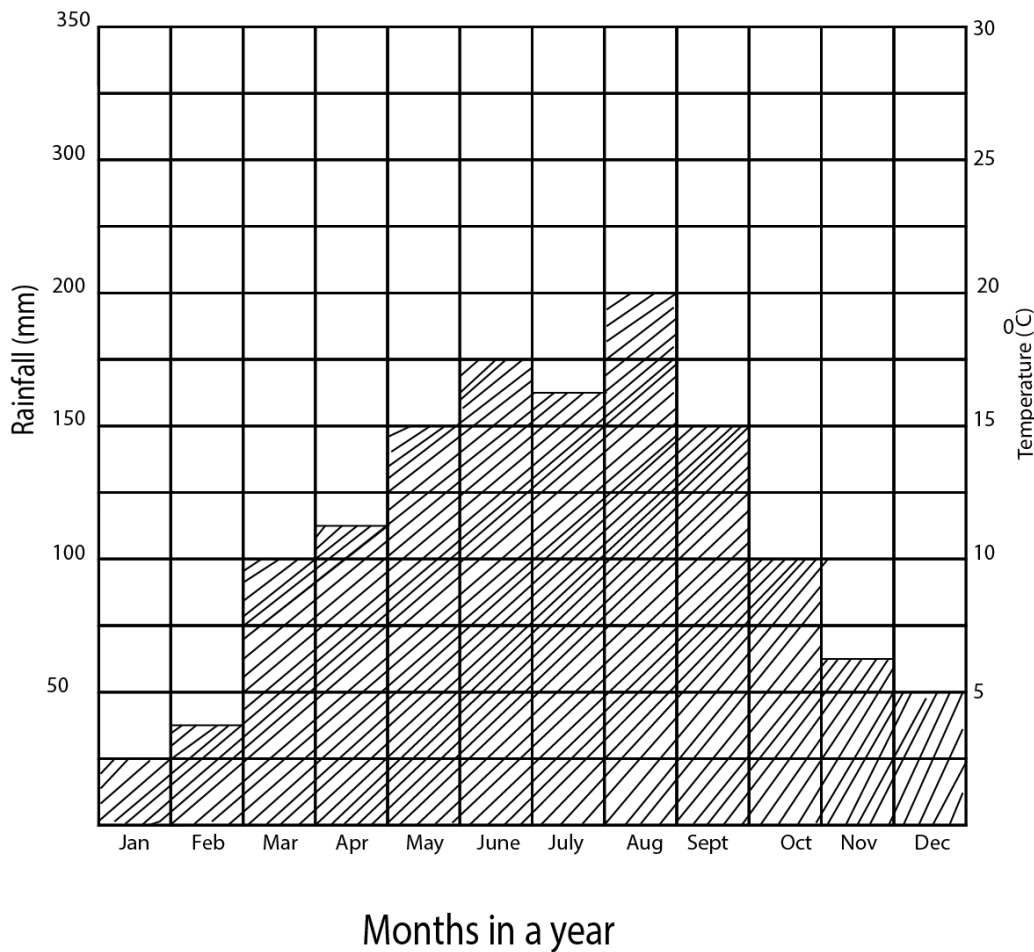
---

Use letter K to locate Mozambique Channel

## Question 21

### PLE 2012

Below is a climatic graph of Town A. study it carefully and answer questions that follow



- (a) In which month did town A receive the highest amount of rainfall
- 
- (b) Name the month in which the highest temperature was recorded in town A above.
- 
- (c) What was the temperature range of town A?

---

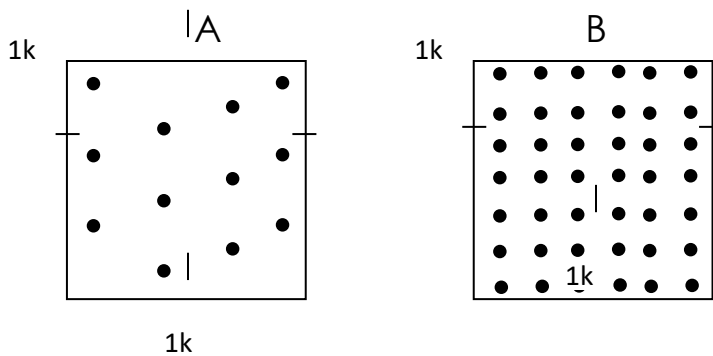
(d) Name the of climate experienced in this town

---

**Question 21b**

**PLE 2012**

The diagram below show the population distribution of two different area in a country. Use them to answer the question that follow.



(a) What is the population distribution of area?

A

---

B

---

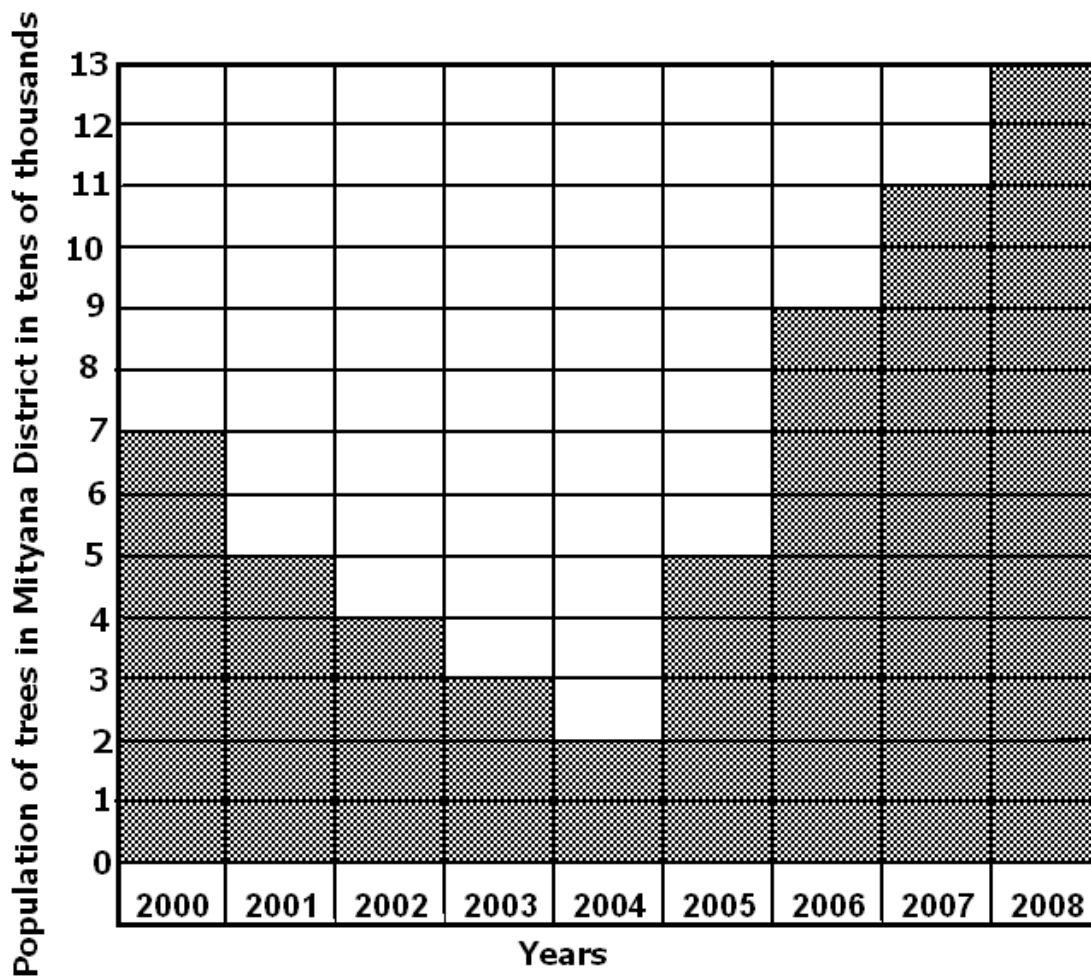
(b) Mention any one disadvantage of the population distribution of area B to country.

(c) Give any one advantage of the people living in area A over those living in area B

---

## Question 22

Study the graph and use it to answer questions 47.



a) Identify any two human activities that might have affected the number of trees between 2001 and 2004

(i) \_\_\_\_\_

(ii) \_\_\_\_\_

(b) How many trees were recorded in 2005?

\_\_\_\_\_

- (c) Give any one measure government put in place that affected the number of trees between 2005 and 2008

---

---

### Question 23

Study the monthly temperature and rainfall shown in the table below and answer the questions that follow.

Months	J	F	M	A	M	J	J	A	S	O	N	D
Temp/°C	23	21	20	21	25	24	23	21	20	20	21	24
Rain fall in mm	40	80	200	250	170	70	110	150	250	220	90	50

- (a) Name the type of climate shown in the table.

---

- (b) Give any one characteristic of the climate shown in the table.

---

- (c) State any one reason why this climate is good for growing crops.

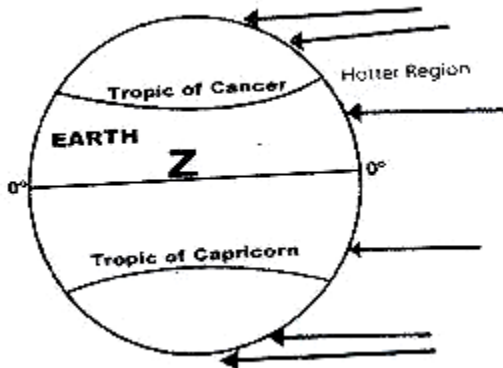
---

- d) Suggest any one way in which the people living in this area can protect their environment in order to continue with climate shown in the table

---

### Question 24

Study the diagram below and used it to answer questions about it.



a) Name the line of latitude marked 0°.

---

b) What term is used to mean when the sun is overhead at Latitude marked 0° twice a year?

---

c) Give two reasons why areas along the Latitude marked 0 are hotter than those towards the poles.

---

### Question 25

The table below shows coffee production in Brazil.

Year	Coffee production in tones	Earnings in Billions
2000	16,000	21
2001	18,000	25
2002	25,000	15
2003	10,000	30
2004	13,000	14
2005	9,000	28

a) In which year did Brazil get the biggest earning in selling coffee?

---

---

b) Why do you think Brazil earned a lot of money from less coffee in 2005?

---

c) Suggest one cause for the decline in coffee production in 2004.


---

d) How can Brazil increase its exports from coffee production?

---

### Question 26

Study the diagram below and answer questions that follow.



a) Name the weather condition A.

---

b) Mention any one activity that can be carried out during the weather condition B.

---

c) How is weather condition D important to crops?

---

e) Give one effect of climatic change to farmers.

---

## Question 26

Hajji Sula earns sh.800,000 a month and spends as follows:

- (i) **Rent**            – **sh.150,000**
- (ii) **Fees**            – **sh.200,000**
- (iii) **Others**       – **sh.250,000**
- (iv) **Savings**       – **sh.200,000**

(a) What type of budget does Hajji Sula use?

---

(b) Calculate Hajji Sula's expenditure.

---


(c) Draw a diagram to illustrate Hajji Sula's expenditure.



**Question 27**

**PLE 2017**

The diagram below is of the Uganda Coat of Arms. Use it to answer the questions that follow.



a) Name the features marked B and D.

B \_\_\_\_\_

D \_\_\_\_\_

b) What does the feature marked A represent?

\_\_\_\_\_

c) Why was the feature C chosen as the national emblem?

\_\_\_\_\_

— —  
— —  
— —